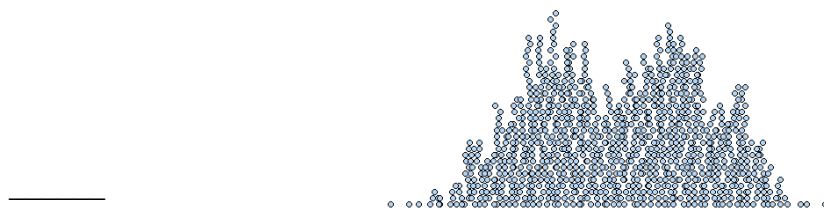
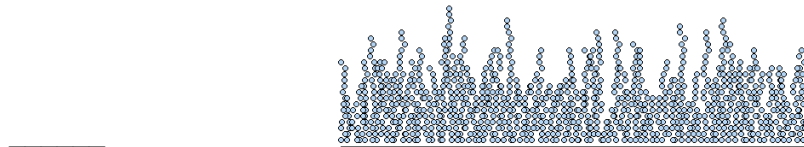
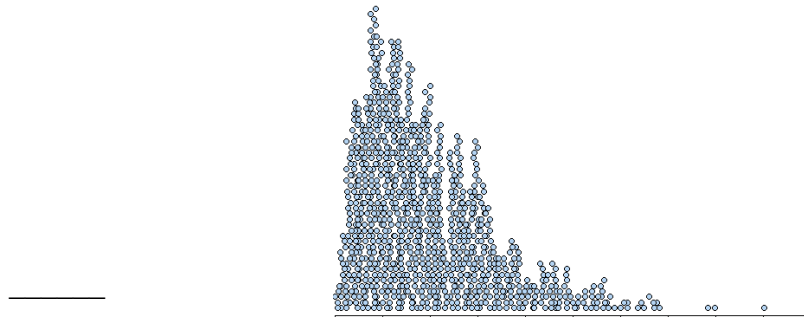
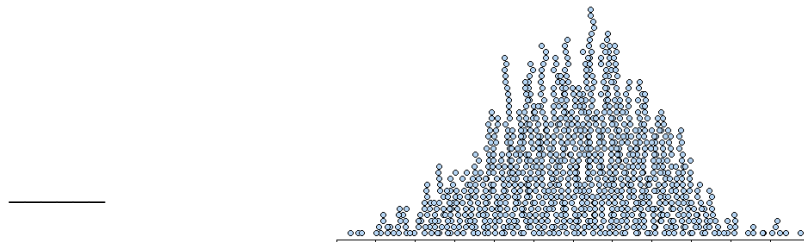


Sketching Distributions

Name(s): _____

Set 1 Matching

Match the distributions to sketches 1-5 that your partner made. Sketch the Set 2 distributions displayed by your teacher on the back of this page. Label them A-E.



Sketching Distributions

Name(s): _____

Set 2 Matching

Match the distributions to sketches A-E that your partner made. Sketch the Set 1 distributions displayed by your teacher on the back of this page. Label them 1-5.

