

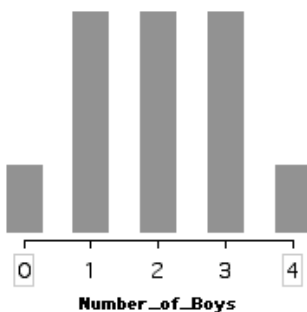
Four-Child Families

Name(s) _____

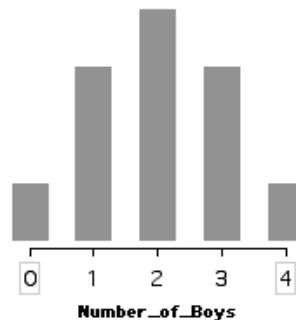
Here are three different plots you might get when you count the number of real families with four children and grouped them by the number of boys.



Plot A

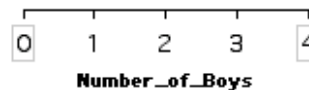


Plot B

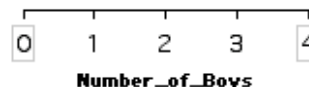


Plot C

- Which plot do you expect the plot of real data to look most like? Explain?
- Do you know any families that have four children? If so, list the family's last name and the order of boys and girls (oldest to youngest) on an index card.
- As a class, you'll sort index cards that list the boys and girls in real families of four children. When finished, sketch the plot your class ended up with on the axis at right.



- Open the TinkerPlots document **Four-Child Families.tp**. Drag the attribute *Count_boys* from the table to the horizontal axis of the plot.
- Separate the values and stack them. Sketch your final plot.



6. Your teacher will give you a pile of blank bars and two colors of stickers labeled G for girl and B for boy. Make a bar for each different four-child family order. Take a family with "G, B, G, G," for example. Put a "G" in the first square, a "B" in the second square, and then two more "G's" in the last two squares.
 7. How many different four-child families can you make?
 8. Make an organized chart of all the different four-child families that are possible.
-
9. Using your chart of all possible four-child families, figure out the probabilities for these events:
 - a. 2 girls and 2 boys (in any order)
 - b. All boys
 - c. All girls
 - d. 1 boy and 3 girls (in any order)
 - e. 1 girl and 3 boys (in any order)
 - f. "G, B, B, G" (in this order)
 - g. Fewer than 3 boys
 - h. More girls than boys
 10. Use TinkerPlots to build a sampler that makes 100 four-child families. Make a plot showing the number of families with 0, 1, 2, 3, and 4 boys.
 11. Does the plot you make look like the chart you made in Step 8?
 12. What did you learn about probability from this activity?